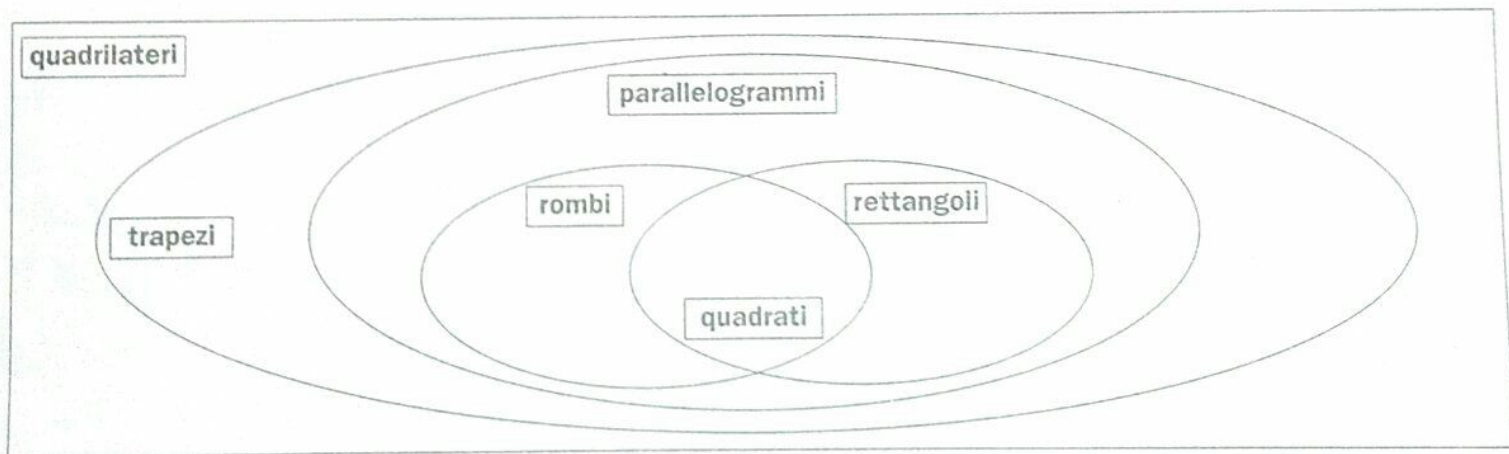

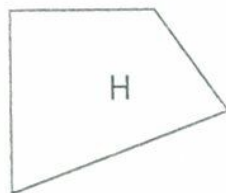


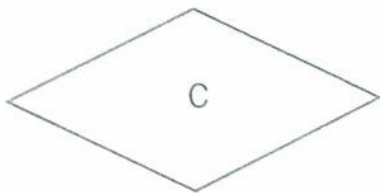

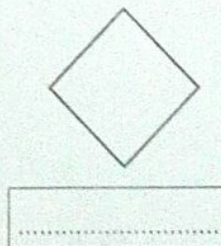
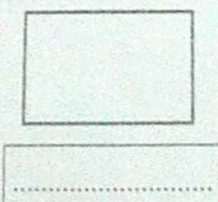
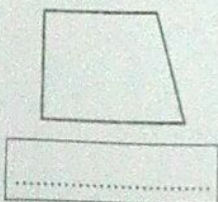
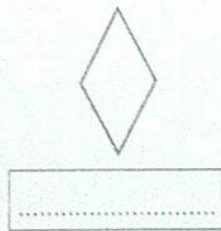
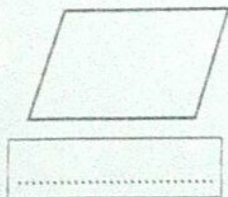
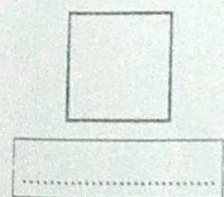


1 Colloca le lettere che distinguono i seguenti quadrilateri nel giusto insieme:

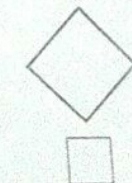
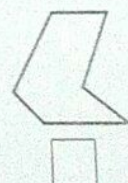
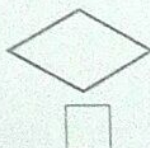

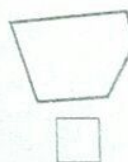


I **parallelogrammi** sono quadrilateri con tutti i lati opposti paralleli.
I **trapezi** sono quadrilateri con almeno due lati opposti paralleli.

2 Distingui fra di loro i vari parallelogrammi. Quale delle figure non è un parallelogramma? Colorala di blu:



3 Segna con una crocetta i trapezi e colora di rosso i parallelogrammi:



2. Osserva le seguenti figure e poi completa la tabella mettendo una crocetta nelle caselle.

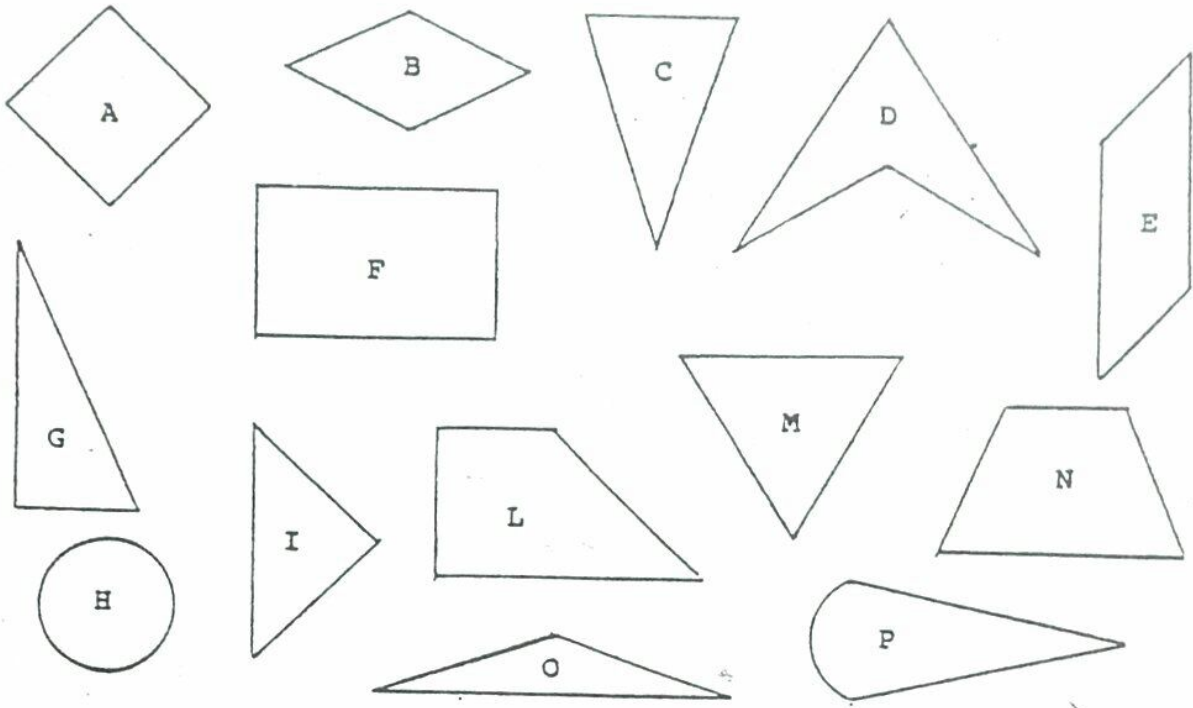



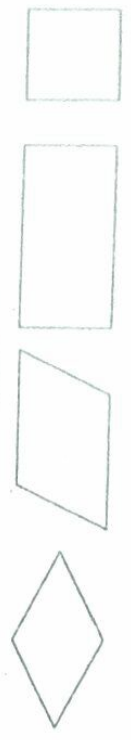
Figure	Quadrilateri	Triangoli	Hanno tutti gli angoli uguali	Hanno tutti i lati uguali	Hanno almeno due lati perpendicolari	Hanno gli angoli opposti uguali
A						
B						
C						
D						
E						
F						
G						
H						
I						
L						
M						
N						
O						
P						

I QUADRILATERI

Trapezi
Hanno almeno una coppia di lati paralleli



Parallelogrammi
Hanno due coppie di lati paralleli



Hanno i lati perpendicolari



Non hanno i lati perpendicolari



Lati uguali



Lati uguali




Lati non uguali



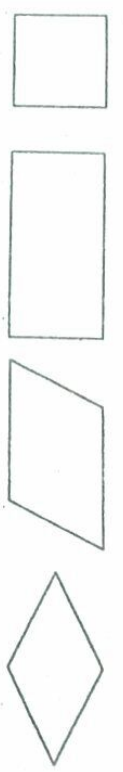
QUADRATO RETTANGOLO ROMBO PARALLELOGRAMMA

I QUADRILATERI


Trapezi
Hanno almeno una coppia di lati paralleli



Parallelogrammi
Hanno due coppie di lati paralleli



Hanno i lati perpendicolari



Non hanno i lati perpendicolari



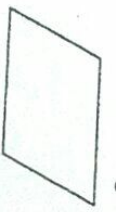
Lati uguali



Lati uguali



Lati non uguali



QUADRATO RETTANGOLO ROMBO PARALLELOGRAMMA